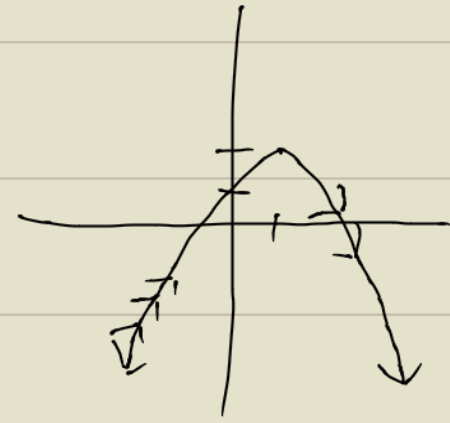


INCREASING, DECREASING, CONSTANT

#1

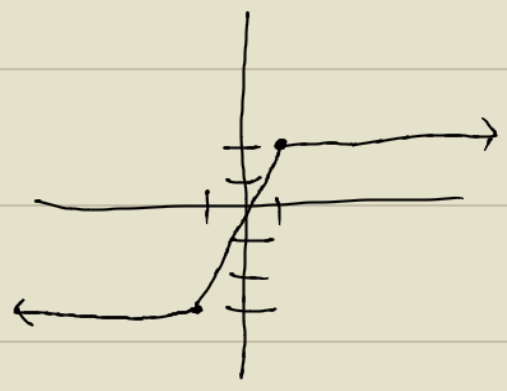
* LOOK AT GRAPH FROM LEFT TO RIGHT



INC $(-\infty, 1)$ DEC $(1, \infty)$

NOTE: WHEN WRITING ANSWERS ONLY USE X-VALUES

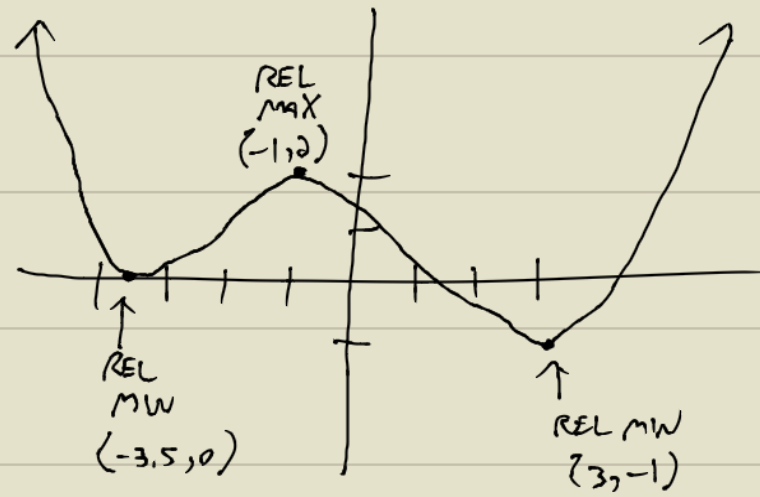
#2



CON $(-\infty, -1)$
 INC $(-1, 1)$
 CON $(1, \infty)$

#3

RELATIVE EXTREMA



#4

